



April 2023

Fundamental IT Engineer Examination (Morning)

Questions must be answered in accordance with the following:

Question Nos.	Q1 - Q80
Question Selection	All questions are compulsory.
Examination Time	9:30 - 12:00 (150 minutes)

Instructions:

1. Use a pencil. If you need to change an answer, erase your previous answer completely and neatly. Wipe away any eraser debris.
2. Mark your examinee information and your answers in accordance with the instructions below. Your answer will not be graded if you do not mark properly. Do not mark nor write on the answer sheet outside of the prescribed places.

(1) **Examinee Number**

Write your examinee number in the space provided, and mark the appropriate space below each digit.

(2) **Date of Birth**

Write your date of birth (in numbers) exactly as it is printed on your examination admission card, and mark the appropriate space below each digit.

(3) **Answers**

Select one answer (a through d) for each question.

Mark your answers as shown in the following sample question.

[Sample Question]

Q1. Which of the following should be used for marking your answer on the answer sheet?

- a) Ballpoint pen b) Crayon c) Fountain pen d) Pencil

Since the correct answer is “d) Pencil”, mark the answer as below:

[Sample Answer]



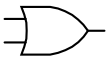








Q1	<input type="radio"/> a	<input type="radio"/> b	<input type="radio"/> c	<input checked="" type="radio"/>
-----------	-------------------------	-------------------------	-------------------------	----------------------------------

--

Symbols commonly used in questions

Unless otherwise noted in each question, the following notational conventions are applied as shown in the table.

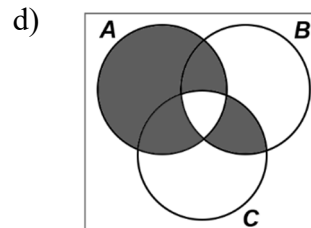
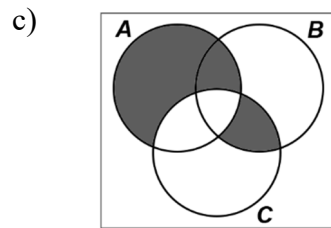
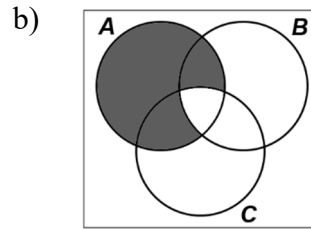
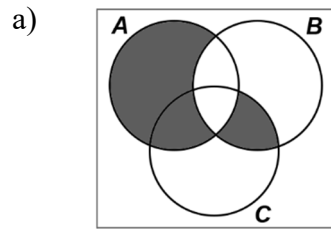
Logic Circuit

Graphic symbol	Explanation
	AND gate
	NAND gate
	OR gate
	NOR gate
	Exclusive OR (XOR) gate
	Exclusive NOR gate
	Buffer
	NOT gate
	Three-state buffer (or tri-state buffer)
 	A small circle or “bubble” on either the input or the output terminal shows inversion or negation of the logic state.

Company names or product names mentioned in the examination questions are the trademarks or registered trademarks of their respective companies or organizations. The symbol ® or ™ is not used within.

Q1. Which of the following is a Venn diagram that represents the set below?

$$(A \cap \bar{C}) \cup (A \cap \bar{B} \cap C) \cup (\bar{A} \cap B \cap C)$$



Q2. When the hexadecimal value ABCD in a 32-bit register is logically shifted right by two bits, which of the following is the resulting value in hexadecimal?

a) 2AF3

b) 6AF3

c) AF34

d) EAF3

Q3. What is the probability that at least three coins land heads up when four unbiased coins are tossed simultaneously?

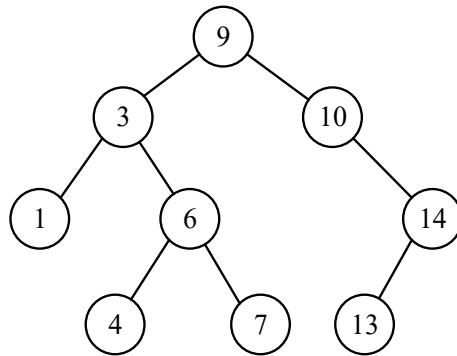
a) $1/4$

b) $5/16$

c) $3/8$

d) $5/8$

Q7. Which of the following is the pre-order traversal of the tree below?



- | | |
|---------------------------------|---------------------------------|
| a) 1, 3, 4, 6, 7, 9, 10, 13, 14 | b) 1, 4, 7, 6, 3, 13, 14, 10, 9 |
| c) 9, 3, 1, 6, 4, 7, 10, 14, 13 | d) 9, 3, 10, 1, 6, 14, 4, 7, 13 |

Q8. The operations for a queue are defined as below.

ENQ n : This operation appends data n to the queue.

DEQ: This operation removes data from the queue.

On an empty queue, the operations ENQ 1, ENQ 2, ENQ 3, DEQ, ENQ 4, ENQ 5, DEQ, ENQ 6, DEQ, DEQ are performed. After that, when DEQ is performed, what is the value that is removed?

- | | | | |
|------|------|------|------|
| a) 1 | b) 2 | c) 5 | d) 6 |
|------|------|------|------|

Q9. A five-digit number $a_1a_2a_3a_4a_5$ needs to be stored in an array by means of hashing. When the hash function is $\text{mod}(a_1+a_2+a_3+a_4+a_5, 13)$ and the number is stored in the array element at the position corresponding to the calculated hash value, which of the following is the position where 54321 is stored in the array? Here, the value of $\text{mod}(x, 13)$ is the remainder after dividing x by 13.

Position	Array
0	
1	
2	
\vdots	\vdots
11	
12	

- a) 1 b) 2 c) 7 d) 11

Q10. Which of the following is a program that achieves dynamic processing in a web environment and operates only on a web server?

- a) JavaScript b) Java applet
c) Java servlet d) VBScript

Q11. When a CPU has a special register used in push and pop instructions, which of the following is an appropriate term for this register?

- a) Instruction register b) Program counter
c) Stack pointer d) Status register

Q12. Which of the following is classified as an internal interrupt?

- a) Interrupt caused by an abnormal power condition, such as a momentary loss of commercial power supply
b) Interrupt caused by performing a divide-by-zero operation
c) Interrupt caused by the completion of input or output
d) Interrupt caused by the occurrence of a memory parity error

Q13. Which of the following is the technique that minimizes the number of write operations to the main memory by updating the data only in the cache memory and updating into the main memory later?

- a) Overlay b) Write back c) Write protected d) Write through

Q14. Which of the following is an appropriate description of a 3D printer's function?

- a) It detects the shape of three-dimensional objects and produces output of 3D data.
- b) It functions by pushing the pins of a high temperature printing head onto heat-sensitive paper.
- c) It makes three-dimensional objects using methods such as fused filament fabrication.
- d) It projects computer graphics onto uneven three-dimensional objects such as buildings and furniture.

Q15. Which of the following is the RAID configuration for achieving the highest speed disk access at the cost of reliability?

- a) RAID 0 b) RAID 1 c) RAID 5 d) RAID 6

Q16. When system availabilities of a cold standby system, a simplex system, and a dual system are compared, which of the following shows the order arranged from highest to lowest? Here a computer or computers that compose each system are all the same.

- a) Cold standby system, dual system, simplex system
- b) Cold standby system, simplex system, dual system
- c) Dual system, cold standby system, simplex system
- d) Simplex system, cold standby system, dual system

Q17. A printer prints 400 characters per second. The printer uses interrupt-driven I/O and each character printed requires an interrupt that takes 50 microseconds. What percentage of the printer's CPU is available to do other work during printing? Here, other overhead time for the CPU can be ignored.

- a) 98 b) 96 c) 4 d) 2

Q18. In preemptive Shortest Remaining Time First (SRTF) scheduling, on arrival or completion of any process, the scheduler schedules processes from the list of available processes and running processes that have the least remaining CPU-burst time. The four processes, namely, P1, P2, P3, and P4, their corresponding CPU-burst time and arrival time are shown in the table below. Which of the following is the average waiting time in milliseconds for the processes to be executed in preemptive SRTF scheduling?

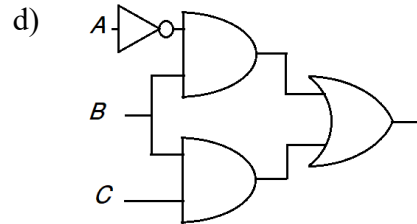
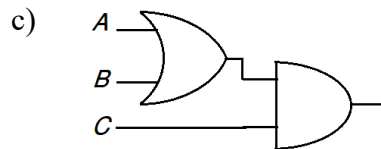
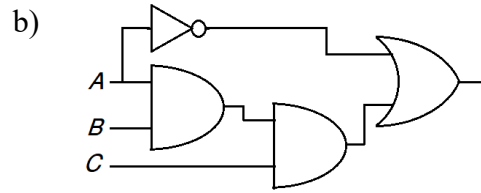
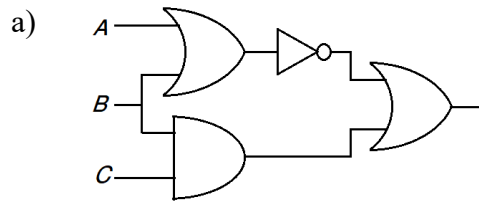
Process	Arrival time in millisecond	CPU-burst time in millisecond
P1	0	8
P2	2	3
P3	3	7
P4	5	4

- a) 3.0 b) 4.75 c) 5.5 d) 10.25

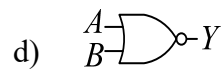
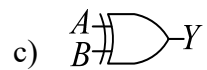
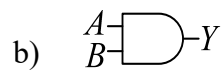
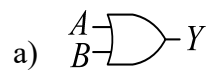
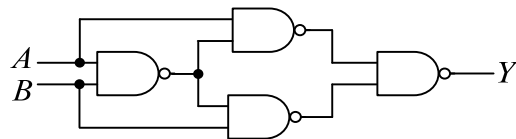
Q19. Among the different types of backup methods, which of the following is incremental backup? Here, in the first backup, all files are backed up and the information that indicates a file update managed by the operating system is reset.

- a) All files are backed up regardless of information indicating a file update, and the information indicating a file update is left unchanged.
- b) All files are backed up regardless of information indicating a file update, and the information indicating a file update is reset.
- c) Only files with information indicating a file update are backed up, and the information indicating a file update is left unchanged.
- d) Only files with information indicating a file update are backed up, and the information indicating a file update is reset.

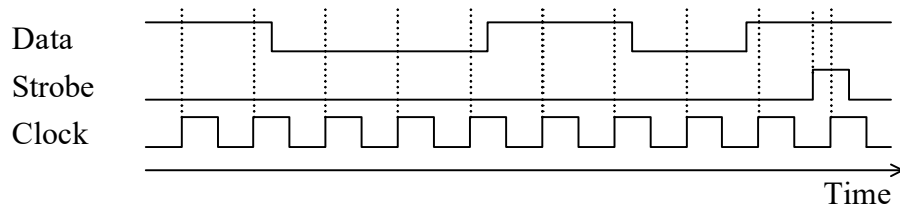
Q20. Which of the following is the logic circuit that is equivalent to the logical expression $\bar{A}BC + AC$?



Q21. Which of the following is the logic gate that is equivalent to the logic circuit shown below?



Q22. At the rising edge of the clock signal, the content of an 8-bit serial-in parallel-out shift register is shifted upward, while positive logic data is simultaneously read into the least significant bit. The value is fixed at the rising edge of a strobe. When the results of an observation of each signal's waveform are as shown in the diagram below, which of the following is the value of the shift register after it is fixed? Here, numeric values are represented in hexadecimal.



- a) 63 b) 8D c) B1 d) C6

Q23. Which of the following is a case where outline fonts rather than bitmap fonts are suitable for use?

- a) To display characters as quickly as possible
- b) To display characters in monospace
- c) To display single-byte and double-byte characters at the same time
- d) To enlarge characters by a given scale factor

Q24. What is the approximate minimum required bandwidth for delivering a 30-frames/second video in 800 x 600 pixel and 24-bit full color? Here, the data is not compressed during communication.

- a) 350 kbps b) 3.5 Mbps
- c) 35 Mbps d) 350 Mbps

Q25. Which of the following is an appropriate explanation of a relational database?

- a) It connects a parent record and a child record by using a pointer.
- b) It represents data in the form of a two-dimensional table.
- c) It represents the structure and meaning of data by using tags.
- d) It retains data and procedures in an integrated (or encapsulated) form.

Q26. Which of the following is the key of a relation schema $R = (M, N, O, P, S, T)$, when R has the functional dependencies shown below?

$$O \rightarrow T$$

$$S \rightarrow M$$

$$OS \rightarrow P$$

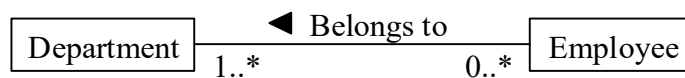
$$M \rightarrow N$$

- a) MO b) MS c) OP d) OS

Q27. Which of the following is an appropriate description of keys in a relational database?

- a) A primary key can be assigned as a composite key and must contain a column that is defined as a foreign key.
- b) The values of the primary and foreign keys cannot be duplicated and cannot be null.
- c) The values of the primary key must be unique, and the values of the foreign key must match the values of the related table's primary key and can be duplicated.
- d) The values of the primary key need to match the values of the related table's primary key, but the values of the foreign key do not need to match the values of the related table's primary key.

Q28. Which of the following is the appropriate interpretation of the conceptual data model shown in the diagram in UML?



- a) A department cannot exist without any employees.
- b) An employee can belong to multiple departments at the same time.
- c) An employee does not have to belong to a department.
- d) The total number of employees and the total number of departments match.

Q29. An employees table contains fields in the order shown below.

- emp_id is an integer value and is used as the primary key of the table.
- emp_name can store up to 10 characters.
- salary is a decimal value up to 4 digits.

Which of the following is an appropriate INSERT statement to insert the data to the table? Here, NOT NULL constraint does not exist and the table does not have any records before the insert.

- a) `INSERT INTO employees (emp_id, emp_name) VALUES (4, 'Hulk');`
- b) `INSERT INTO employees (emp_id, salary, emp_name) VALUES (3, 'Taylor', 1700);`
- c) `INSERT INTO employees (emp_id, salary, emp_name) VALUES (5, 1900, 'Bartholomew');`
- d) `INSERT INTO employees VALUES (2, 'Harry', 15000);`

Q30. Which of the following is the purpose of setting an index in the columns of the table of a relational database by a user?

- a) To enable economization of disk space when a single large table is distributed and saved on several disks.
- b) To enable efficient access to the storage location of data in order to improve the search speed.
- c) To ensure that no value is duplicated in a column.
- d) To match the value of the foreign key column with the value of the primary key of another table.

Q31. Which of the following is a role of DNS in a TCP/IP network?

- a) A private IP address is translated into a global IP address in order to access the Internet.
- b) A program in a server can be invoked only by its name without taking the server's IP address into consideration.
- c) Domain names, host names, and other such information are mapped to IP addresses.
- d) In response to an assignment request for an IP address from a PC or a printer, an unused address is chosen from the addresses registered in the server.

Q32. In the same subnet, which of the following is the devices that will receive the data when the destination address is set to 255.255.255.255?

- a) All devices in the same subnet
- b) All devices using the same DNS server
- c) Only the default gateway of the subnet
- d) Only the device sending the data to itself

Q33. How many host addresses are there in the network 192.168.10.0/26?

- a) 30
- b) 62
- c) 126
- d) 254

Q34. In a TCP/IP network, which of the following is a protocol used to match the clocks of the server and the client?

- a) ARP
- b) ICMP
- c) NTP
- d) RIP

Q35. As for the use of e-mails over the Internet, which of the following is a standard that extends the header field and can handle not only text but also audio and images?

- a) HTML
- b) MHS
- c) MIME
- d) SMTP

Q36. Which of the following is malware that is activated by attackers to launch attacks on other computers?

- a) Bot
- b) Rootkit
- c) Trojan Horse
- d) Worm

Q37. Which of the following is considered a violation of confidentiality?

- a) Denial of services to a website handling confidential information by generating fake heavy traffic in the network
- b) Destruction of server hardware storing personal information caused by high voltage due to failure of voltage stabilizer
- c) Disturbing communication by destroying ciphertext of confidential information
- d) Tricking a user into providing personal information to a fake website

Q38. Which of the following is an appropriate description of “asymmetric encryption,” used for encrypting and decrypting messages for secure communication?

- a) A ciphertext message is shorter than its original plaintext message.
- b) A message receiver’s public key is used to encrypt the message and his/her private key is used to decrypt the message.
- c) A message sender’s private key is open to everyone and is used to encrypt the message, and each message receiver’s public key is used to decrypt the message.
- d) A secret key needs to be shared among those who need to receive the message.

Q39. Which of the following is a method of social engineering used in a targeted e-mail attack?

- a) “Unsolicited advertising” is shown in the subject.
- b) Content that appears to be related to the work of the recipient is shown in the subject or body text.
- c) In order to make the recipients access a bogus website, the sender pretends to be a financial institution and sends e-mails indiscriminately.
- d) In order to make the recipients transfer a fee that they do not need to pay, the sender pretends to be a collection agency and sends e-mails indiscriminately.

Q40. In information security, which of the following is a back door?

- a) A LAN port that is incorporated into a switch in order to obtain network communication packets and inspect details of the communication
- b) A tool that searches for an open TCP port on a server on the Internet, and identifies running services
- c) A URL that enables access to a website without going through the official procedures such as password authentication that are normally required for access
- d) An attack that causes a program to crash by entering a string with a length that exceeds the size of an area of memory acquired by the program, causing an overflow

Q41. An asset valued at \$200,000 has an exposure factor of 20% and an annual rate of occurrence of 0.5 for the risk of malware infection. How much (in dollars) is the annual loss expectancy of the asset due to malware infection?

- a) 20,000
- b) 40,000
- c) 80,000
- d) 100,000

Q42. Which of the following is residual risk?

- a) Amount of risk that is reduced by implementing risk treatment
- b) Risk that exists prior to performing any risk management activities
- c) Risk that is identified prior to implementing risk treatment
- d) Risk that remains after implementing risk treatment

Q43. Which of the following is a security measure that allows users to run potentially malicious programs on a system with the purpose of observing their behavior, while restricting the programs from accessing outside of the system?

- a) Firewall
- b) Honeypot
- c) IPS
- d) Sandbox

Q44. A packet filtering firewall is installed at the connection point of an internal network and the Internet. Which of the following is the appropriate combination of filtering rules that enables PCs on the internal network to access a web server on the Internet (port number 80)?

a)

Source	Destination	Source port number	Destination port number
PC	Web server	80	1024 or higher
Web server	PC	80	1024 or higher

b)

Source	Destination	Source port number	Destination port number
PC	Web server	80	1024 or higher
Web server	PC	1024 or higher	80

c)

Source	Destination	Source port number	Destination port number
PC	Web server	1024 or higher	80
Web server	PC	80	1024 or higher

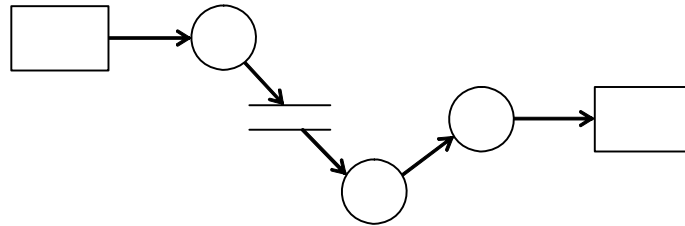
d)

Source	Destination	Source port number	Destination port number
PC	Web server	1024 or higher	80
Web server	PC	1024 or higher	80

Q45. When a sender from domain *A* sends an e-mail to a recipient in domain *B*, which of the following is used by the mail server in domain *A* for authenticating the sender?

- a) APOP b) POP3S c) S/MIME d) SMTP-AUTH

Q46. The diagram below is an example of a DFD that is used in the structured analysis method. Which of the following is represented by a “○” in the diagram below?



- a) Activity
- b) Data flow
- c) Data store
- d) Process

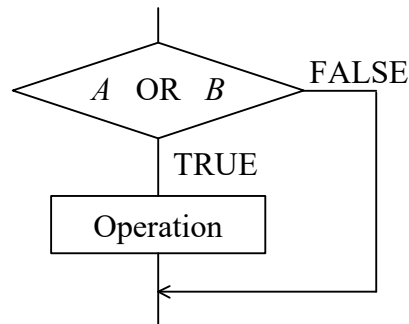
Q47. Among the definitions of software quality characteristics, which of the following characteristics refers to the ease of modifying a program for a certain computer so that it can run on a different architecture?

- a) Changeability
- b) Interoperability
- c) Portability
- d) Usability

Q48. In the error embedding method, when the number of embedded errors is S , the number of discovered errors from the embedded errors is m , the number of latent errors before the start of testing not including embedded errors is T , and the total number of discovered errors is n , which of the following expresses the relationship of S , T , m , and n ?

- a) $\frac{m}{S} = \frac{n-m}{T}$
- b) $\frac{m}{S} = \frac{T}{n-m}$
- c) $\frac{m}{S} = \frac{n}{T}$
- d) $\frac{m}{S} = \frac{T}{n}$

Q49. Which of the following is an appropriate test case when a test is to be performed with decision condition coverage (branch coverage) on the section of a program shown in the figure below?



a)

<i>A</i>	<i>B</i>
False	True

b)

<i>A</i>	<i>B</i>
False	True
True	False

c)

<i>A</i>	<i>B</i>
False	False
True	True

d)

<i>A</i>	<i>B</i>
False	True
True	False
True	True

Q50. Which of the following is the appropriate term for referring to activities such as creating a class diagram in UML from a program?

a) Backtracking

b) Forward engineering

c) Reengineering

d) Reverse engineering

Q51. As for software development activities, which of the following is refactoring?

a) In order to improve the maintainability of a program, its internal structure is modified without any change to the external specifications.

b) In order to improve the quality of a program, two programmers cooperate to perform the coding of a single program.

c) In order to obtain feedback from users, the prototype of a program to be provided is created at an early stage.

d) In order to promptly develop a program to be operated, test cases are set in advance and the program is then coded.

Q52. Which of the following is an appropriate description of the stakeholders involved in a project?

- a) Some stakeholders receive the project result advantageously and others disadvantageously.
- b) The stakeholders are individually identified people, such as project managers.
- c) The stakeholders belong within the organization and do not exist outside of it.
- d) The stakeholders participate directly in the project; they are not limited to indirect involvement.

Q53. In project management, which of the following is the subject group that includes processes having Purpose 1 and those having Purpose 2?

[Purposes]

Purpose 1: To clarify the objectives, deliverables, requirements, and boundaries of the project

Purpose 2: To maximize the positive impacts to the project and minimize the negative impacts, both of which occur as a result of changes in the objectives and deliverables of the project

- a) Communication
- b) Procurement
- c) Risk
- d) Scope

Q54. A project was planned to be completed in six months. After six months, the project is behind schedule. The actual cost of Activity *A* is \$100,000. The planned value of Activity *A* is \$80,000. Activity *A* is only 75% complete. What is the schedule performance index and cost performance index of the project?

	Schedule performance index	Cost performance index
a)	0.6	0.75
b)	0.75	0.6
c)	0.75	1.25
d)	1.25	0.75

Q55. Which of the following is an appropriate explanation of the Function Point method for creating an estimate for software development?

- a) It is a method for estimating the overall workload, where the development work is broken down into units of work items. The cumulative total of the workload for each item is then calculated based on a predefined standard value for the workload that is applied to each individual work item.
- b) It is a method for estimating the person-hours and development duration, on the assumption that the development scale is known. It can be applied to all fields, not just to the business field.
- c) It is a method for estimating the scale and person-hours of development based on some past experience of similar software, where similarities and differences of software are analyzed while past data is used for the similarities and past experience for the differences.
- d) It is a method for estimating the scale of software, where the functions of the software are quantitatively measured using elements such as the number of I/O data items and the number of files, and an adjustment is performed based on the complexity.

Q56. When an IT service is discontinued, it is important to comprehensively identify the assets that were used and appropriately remove or free surplus assets. Which of the following is an event that may occur due to mistaken removal of assets that should remain, but does not occur because of the removal of assets that should be removed?

- a) Occurrence of incidents involving other IT services that share assets with the discontinued IT service
- b) Overpaying software or hardware maintenance charges
- c) Wasting money on software licenses
- d) Wasting space that becomes unused on magnetic disks

Q57. As for activities in capacity management to estimate a service's capacity, capability, and performance, which of the following is trend analysis?

- a) As the first phase of modeling, creating a model that accurately reflects the current performance
- b) Generating simulated transactions and predicting the response time and throughput of a service
- c) Understanding the chronological usage of a specific resource and predicting usage changes in the future
- d) Using mathematical techniques, such as queueing theory, and predicting the response time and throughput of a service

Q58. Which of the following is an appropriate description concerning system operation?

- a) Disconnecting failed components to continue the system's more important functions is called fall back operation.
- b) Re-executing a program using data recorded at a checkpoint is called rebooting.
- c) Recording transactions for the purpose of restoring a database to its condition prior to changes is called data logging.
- d) Regularly saving files to another recording media for the purpose of restoration in the event of failure is called restoring.

Q59. In the system design phase, when an audit is performed on the control to reduce the risk of user requirements not being met, which of the following is a point to be checked?

- a) Whether programming is performed in accordance with the specified conventions and standards
- b) Whether the program specifications are created based on the system design documents
- c) Whether the test plan is created based on the system test requirements, and the manager's approval of the system operations department is obtained
- d) Whether the user department participates in the review of the system design documents

Q60. When an information system department enters data sheets issued by a business operations department, which of the following is an appropriate task executed by the information system department?

- a) The data sheets are retained in the information system department until the due date for processing, and the number of sheets received is checked and confirmed just before the due date.
- b) To enable the business operations department to check the processing results of each data sheet, the processing results list is sent to that department.
- c) To prevent unauthorized use or leakage of confidential information, data sheets are disposed of immediately after data entry is completed.
- d) When the data sheet contains an obvious error, the data sheet is corrected, and an entry is made at the discretion of the person in charge of data entry.

Q61. Which of the following is an example of RPA that is used to proceed with business innovation with the aim of resolving management issues, such as a shortage of staff members?

- a) Deploying robots for assembly work instead of employees engaged in the assembly of components on the manufacturing line.
- b) Processing standardized routine activities such as data input, and cross-checking of the business system by software instead of the clerical staff members.
- c) Replacing manned stores with unmanned stores run by cameras and an electronic payment system for analysis of IC tags and images.
- d) Replacing transfer of stored products through manual operations by using a forklift or something similar with an automated warehouse system where computer control has rendered human labor obsolete.

Q62. Which of the following is a system where the use of a state transition diagram is appropriate when the system is designed?

- a) Electricity charge calculation system that calculates charges based on the amount of power usage from power meter readings.
- b) Greenhouse control system that keeps the environment in a greenhouse optimal based on the data of an installed sensor.
- c) Inventory control system that performs the collection and aggregation of inventory assets at the end of every month and at the time of settlement.
- d) System that measures the operational status of the system resources and creates a report.

Q63. Which of the following is an explanation of the digital divide?

- a) It refers to an economic or social gap that occurs due to differences in abilities and opportunities to use PCs and communications.
- b) It refers to communications and broadcast services that any citizen can access with standard charges, without any differences between regions.
- c) It refers to the ability of citizens to participate directly in the policies of government and autonomous bodies by using the Internet.
- d) It refers to the provision of all services in a single place for each event of the daily life of citizens or each field of corporate activity.

Q64. Procurement is performed by using the comprehensive evaluation bidding method under the conditions shown below. When the bidding prices and technology points of Companies *A* to *D* are as shown in the table below, which of the following is the successful bidder?

[Conditions]

- (1) The bidder with the highest comprehensive evaluation points obtained by summing up the price points and the technology points is the successful bidder.
- (2) The target price is 100,000 dollars. Any bids that exceed the target price are not evaluated.
- (3) The price points are calculated by the formula shown below.

$$[1 - (\text{Bidding price} / \text{Target price})] \times 100$$

[Bidding price and technology points of Companies *A* to *D*]

	Bidding price (1,000 dollars)	Technology points
Company <i>A</i>	70	50
Company <i>B</i>	80	65
Company <i>C</i>	90	80
Company <i>D</i>	110	100

- a) Company *A* b) Company *B* c) Company *C* d) Company *D*

Q65. Which of the following is an explanation of green procurement (sustainable procurement)?

- a) It refers to a certificate that enables commercial trading of green power that is generated from natural energy such as sunlight, biomass, wind power, and geothermal heat.
- b) It refers to a mass promotion of environmental protection activities and fund raising from investors for the environmental protection
- c) It refers to a preferential purchase of products and services that exert a lower environmental burden.
- d) It refers to international standards that employ labels to certify that a product contributes to environmental protection.

Q66. Among the mechanisms that are utilized on the Internet, which of the following is an explanation of crowdfunding?

- a) It refers to a company placing an order with a person who is judged to be qualified to outsource work to an unspecified number of people on the website through prior notification of business operations.
- b) It refers to a web service for individuals that displays information on the account transactions of multiple financial institutions at once by a single authentication through prior registration of multiple account information.
- c) It refers to payment from an advertiser to a website operator when a person who is browsing the website purchases a product from the EC site by using the link from the published advertisement.
- d) It refers to raising money from an unspecified number of individuals who support a business project that is published on the website, and who expect to obtain products and rights in return.

Q67. Which of the following is a characteristic of the maturity stage in the product life cycle?

- a) Demand decreases and some companies start withdrawing. A company determines whether it can be a strong player in this stage and considers advancing into alternative markets.
- b) Demand grows, and the product differentiation and segmentation of the market become evident. Competition intensifies, and it becomes important to add new models and reduce cost.
- c) Demand is partial, and cultivation of new demand is the key to success or failure. It is necessary to persuade specific targets with conviction.
- d) The market begins to understand the value of a product. Both the product line and the channel must be expanded. Sales increase, but investment is also needed in this stage.

Q68. Which of the following is mostly tacit knowledge?

- a) A list of countries and their capitals
- b) An inventory of assets
- c) Contents of a washing machine manual
- d) How to ride a bicycle

Q69. Which of the following is an appropriate example of a core technology for the creation of competitive advantage?

- a) It is a development technology that combines general components with the purpose of fast-track development and fast-track market introduction of products.
- b) It is a device technology that employs the same CPU core as that of competitors and enhances the portability of software.
- c) It is an idle reduction technology of an automobile engine that cannot be imitated by competitors.
- d) It is an interface technology whose purpose is to create standard interfaces by forming an alliance and use them commonly.

Q70. A product that is produced through four (4) processes of *A*, *B*, *C*, and *D* must be produced in a quantity of 1,000 units per month. The table below lists the manufacturing time per unit, number of machines owned, and monthly production capacity in hours per machine for each process. Which of the following is a process that is lacking in capability?

Process	Manufacturing time per unit (hours)	Number of machines owned (units)	Monthly production capacity (hours/machine)
<i>A</i>	0.4	3	150
<i>B</i>	0.3	2	160
<i>C</i>	0.7	4	170
<i>D</i>	1.2	7	180

- a) *A* b) *B* c) *C* d) *D*

Q71. Which of the following is an explanation of cryptocurrency mining that is enabled by block chain?

- a) Making payments or settlements by using cryptocurrency in brick-and-mortar stores
- b) Obtaining capital gain by buying and selling cryptocurrency
- c) Obtaining cryptocurrency as a reward for participation in checking or record calculation of cryptocurrency transactions
- d) Transferring money to an individual or organization in cryptocurrency

Q72. Which of the following is an explanation of a sharing economy?

- a) It is a concept by which efficient management and operation of renewable energy and urban infrastructure are performed by using IT, which leads to an improvement in the quality of peoples' lives and helps achieve continuous economic growth.
- b) It is a concept by which the productivity of an entire economy increases as a result of utilizing IT, and the supply and demand gap is eliminated via the progress of SCM, which leads to sustainable growth free from inflation.
- c) It is a mechanism by which sales both over-the-counter and through the Internet are combined in a business transaction, and the benefits of both are utilized and linked to expand overall sales.
- d) It is a mechanism mainly between individuals by which the community function and other functions of social media are utilized to share, lend, or borrow unused assets owned by individuals.

Q73. Which of the following is an appropriate explanation of digital signage?

- a) A technology to embed identification information in data to prevent abuse
- b) An economic or social gap among regions or individuals, arising from lack of opportunities and abilities to utilize information technology
- c) An electronic billboard that displays information such as images and characters
- d) An electronic signature that is used to ensure the validity of information

Q74. Which of the following is an appropriate description of the constituent elements of IoT?

- a) They cover all items that can connect to the Internet or a closed network.
- b) They cover all tangible objects except humans and living things.
- c) They cover digital type devices, and do not cover analog type devices.
- d) They cover only devices that autonomously collect data and perform data analysis.

Q75. Which of the following is a characteristic of OJT?

- a) A dedicated approach to education is possible outside of the workplace.
- b) Because the boss or senior associates provide education in hands-on knowledge and technical skills by staying close to practical affairs, the required competency can be acquired.
- c) Education that focuses on generalized knowledge and technology can be acquired.
- d) Regardless of the ability of the boss or senior associates, occupational knowledge of a specific standard can be acquired.

Q76. To secure transparency in business administration, which of the following is a concept that supervises and monitors a company's activities from the perspective of questions such as for whom the company runs its business, how top management is structured, and whether the organization has self-improvement capabilities?

- a) Core competence
- b) Corporate governance
- c) Corporate identity
- d) Stakeholder analysis

Q77. Which of the following is a description of the ABC analysis?

- a) It analyzes a region in more detail on the basis of various data (population, purchasing power, etc.) by dividing the region into a grid with multiple sections.
- b) It arranges products in order of high sales or high gross profit, divides them into levels on the basis of the cumulative ratio, and then plans to increase the volume of product sales at high levels.
- c) It classifies and aggregates multiple parts of the survey data by factor, and analyzes the sales capacity and status of purchasing the same products.
- d) It repeatedly surveys the same panelist (respondent) many times. This data is used to understand regional trends or changes in the purchasers.

Q78. There are several quality control tools that are used primarily for manufacturing and inspection departments. Which of the following is a graph where appropriate units or attributes for the data are set on the vertical and horizontal axes correspondingly and measured values are plotted accordingly?

- a) Control chart
- b) Histogram
- c) Pareto chart
- d) Scatter diagram

Q79. A company plans to provide a product with a fixed cost of \$128,000, a variable cost per unit of \$48, and a selling price per unit of \$80. Which of the following is the point of sales (in dollars) to become break-even?

- a) 240,000
- b) 320,000
- c) 480,000
- d) 560,000

Q80. In developing new products that are expected to be employed by government agencies of WTO member countries, which of the following are the appropriate standards to be applied?

- a) ANSI standards
- b) FCC standards
- c) IEEE standards
- d) ISO standards